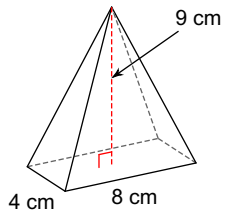


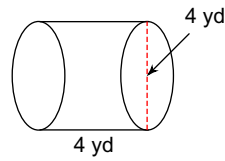
# Assignment

**Find the volume of each figure. Round to the nearest tenth.**

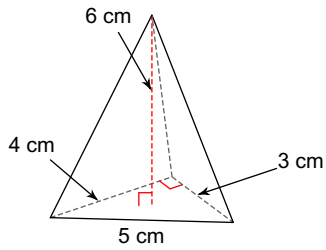
1)



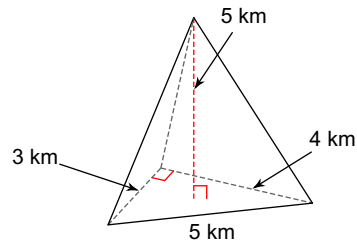
2)



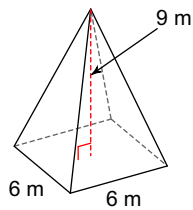
3)



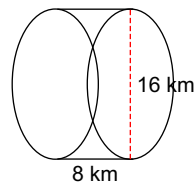
4)



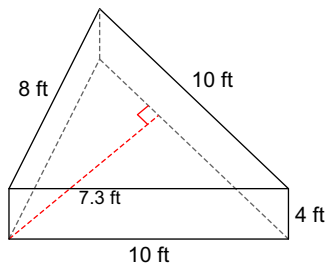
5)



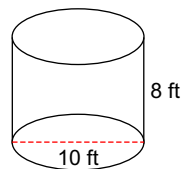
6)



7)



8)



## Answers to Assignment (ID: 1)

1)  $96 \text{ cm}^3$   
5)  $108 \text{ m}^3$

2)  $50.3 \text{ yd}^3$   
6)  $1608.5 \text{ km}^3$

3)  $12 \text{ cm}^3$   
7)  $146 \text{ ft}^3$

4)  $10 \text{ km}^3$   
8)  $628.3 \text{ ft}^3$