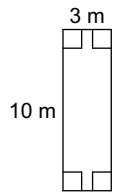


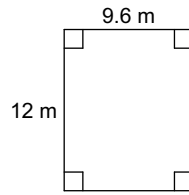
Warm up

Find the area of each.

1)



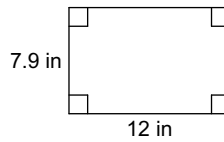
2)



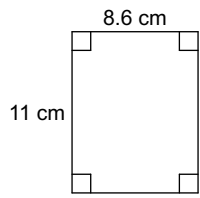
3)



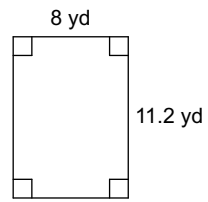
4)



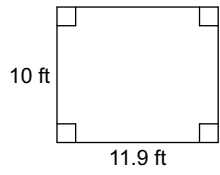
5)



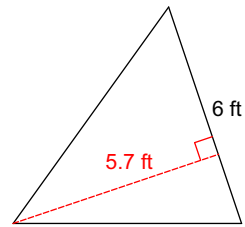
6)



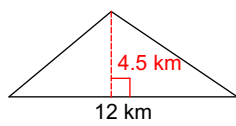
7)



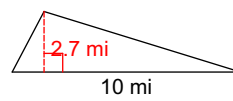
8)



9)



10)



Answers to Warm up (ID: 1)

1) 30 m^2

5) 94.6 cm^2

9) 27 km^2

2) 115.2 m^2

6) 89.6 yd^2

10) 13.5 mi^2

3) 3.7 in^2

7) 119 ft^2

4) 94.8 in^2

8) 17.1 ft^2