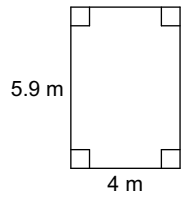


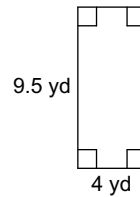
# Assignment

**Find the area of each.**

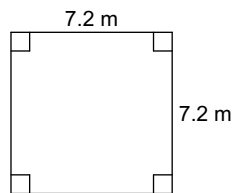
1)



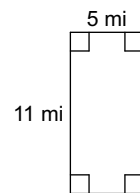
2)



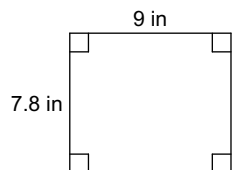
3)



4)

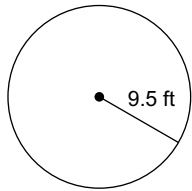


5)

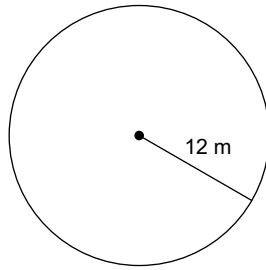


Find the area of each. Round your answer to the nearest tenth.

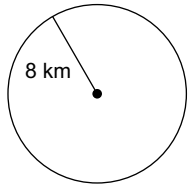
6)



7)

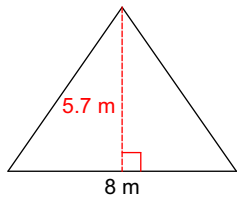


8)

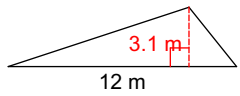


Find the area of each.

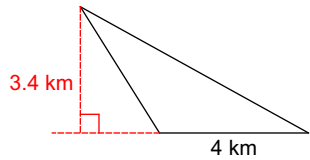
9)



10)



11)



## Answers to Assignment (ID: 1)

1)  $23.6 \text{ m}^2$

5)  $70.2 \text{ in}^2$

9)  $22.8 \text{ m}^2$

2)  $38 \text{ yd}^2$

6)  $283.5 \text{ ft}^2$

10)  $18.6 \text{ m}^2$

3)  $51.84 \text{ m}^2$

7)  $452.4 \text{ m}^2$

11)  $6.8 \text{ km}^2$

4)  $55 \text{ mi}^2$

8)  $201.1 \text{ km}^2$